

## PART - A GENERIC AREA

Choose the most appropriate option.  
(Q.No. 1 to 42)

**Directions for question number 1 and 2 :**


*Study the information below and answer questions based on it.*

Five of India's leading models are posing for a photograph promoting "World Peace and Understanding". But then, Sachin Malhotra the photographer is having a tough time getting them to stand in a straight line, because Natasha refuses to stand next to Jessica since Jessica had said something about her in a leading gossip magazine. Rachel and Anna want to stand together because they are good friends. Ria on the other hand cannot get along well with Rachel, because there is some talk about Rachel scheming to get a contract already awarded to Ria. Anna believes her friendly astrologer who has asked her to stand at the extreme right for all group photographs. Finally, Sachin managed to pacify the girls and got a beautiful picture of five beautiful girls smiling beautifully in a straight line, promoting world peace.

1. If Natasha stands at the extreme left, who is standing second from left ?  
(A) Cannot say  
(B) Jessica  
(C) Rachel  
(D) Ria
2. If Anna's astrologer tells her to stand second from left and Natasha decides to stand second from right, then who is the girl standing at the extreme right ?  
(A) Rachel  
(B) Jessica  
(C) Ria  
(D) None of the options

**Directions for question number 3 to 7 :**

*Study the following graph and the table and answer the questions given below. (Data of different states regarding population of states in the year 2018)*



Total population of the given States = 3276000.

States	Sex and Literacy wise Population Ratio			
	Sex		Literacy	
	M	F	Educated	Non-Educated
A	5	3	2	7
B	3	1	1	4
C	2	3	2	1
D	3	5	3	2
E	3	4	4	1
F	3	2	7	2
G	3	4	9	4

3. If in the year 2018, population of F is increased by 10% and population of B is increased by 12% as compared to the previous year, then \_\_\_\_\_ is the ratio of populations of F and B in 2017.  
(A) 42 : 55  
(B) 62 : 55  
(C) 42 : 11  
(D) 44 : 5

15%  
 9 → 809600  
 2 → 1  
 322 6600 SCB

4. \_\_\_\_\_ is the percentage of total number of males in F, B and D together to states.

- (A) 24%  
(B) 17.5%  
(C) 28.5%  
(D) 29.5%

The number of males in F in the year 2018 is \_\_\_\_\_

- (A) 294650  
(B) 294840  
(C) 301470  
(D) 301200

$$\begin{array}{r} 327600 \\ \times 5 \\ \hline 1638000 \end{array}$$

\_\_\_\_\_ is the ratio of the number of females in G to the number of females in

- (A) 16 : 5  
(B) 16 : 7  
(C) 15 : 11  
(D) 15 : 14

$$15 \div 66\%$$

$$\begin{array}{r} 1630 \\ \times 6 \\ \hline 99980 \end{array}$$

7. \_\_\_\_\_ is the total number of non-educated people in A and B in 2018.

- (A) 1276040  
(B) 1032170  
(C) 1081550  
(D) 1161160



8.

The admission ticket for an Art Gallery bears a password which is changed after every clock hour based on set of words chosen for each day. The following is an illustration of the code and steps of rearrangement for subsequent clock hours.

The Time is 9 a.m. to 3 p.m. Day's first password :

First Batch - 9 a.m. to 10 a.m.  
is not ready cloth simple harmony burning

Second Batch - 10 a.m. to 11 a.m.  
ready not is cloth burning harmony simple

Third Batch - 11 a.m. to 12 noon  
cloth is not ready simple harmony burning

Fourth Batch - 12 noon to 1 p.m.  
not is cloth ready burning harmony simple

Fifth Batch - 1 p.m. to 2 p.m.  
ready cloth is not simple harmony burning and so on.

If the password for 11 a.m. to 12 noon was - "soap shy miss pen yet the she", what was the password for the First Batch ?

- (A) pen miss shy soap she the yet  
(B) shy miss pen soap yet the she  
(C) soap pen miss shy she the yet  
(D) miss shy soap pen she the yet

9. There are 6 boxes numbered 1, 2, ..., 6. Each box is to be filled up either with a red or a green ball in such a way that at least 1 box contains a green ball and the boxes containing green balls are consecutively numbered. The total number of ways in which this can be done is :

- (A) 18  
(B) 19  
(C) 20  
(D) 21

$$\begin{array}{r} 327600 \\ \times 3 \\ \hline 982800 \end{array}$$

SPACE FOR ROUGH WORK

SCB

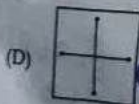

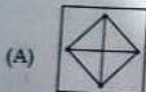

11. If a cube with length, height and width equal to 10 cm, is reduced to a smaller cube of height, length and width of 9 cm then reduction in volume is :

- (A)  $172 \text{ cm}^3$   
 (B)  $729 \text{ cm}^3$   
 (C)  $271 \text{ cm}^3$   
 (D) None of the options

12. If 09/12/2001(DD/MM/YYYY) happens to be Sunday, then 09/12/1971 would have been a :

- (A) Wednesday  
 (B) Tuesday  
 (C) Saturday  
 (D) Thursday

13. Select a suitable figure from the four alternatives that would complete the figure matrix.



7) 71 (

09 + 06 + 71 + 1 + 06

78 84

7) 93 (13

23  
21  
2

14. A player rolls a die and receives the same number of rupees as the number of dots on the face that turns up. What should the player pay for each roll if he wants to make a profit of one rupee per throw of the die in the long run ?

- (A) ₹ 2.50  
 (B) ₹ 2  
 (C) ₹ 3.50  
 (D) ₹ 4

15. Gopal went to a fruit market with certain amount of money. With this money he can buy either 50 oranges or 40 mangoes. He retains 10% of the money for taxi fare. If he buys 20 mangoes, then the number of oranges he can buy with balance amount is :

- (A) 25  
 (B) 20  
 (C) 18  
 (D) 6

50 or 40

16. Number of letter repeated in the given word 'MEASUREMENTS' are indicated in front of each alternative. Identify the correct alternative.

- (A)  $M_2E_2A_2S_2U_1R_1N_1T_1$   
 (B)  $M_2E_3A_1S_1U_2R_1N_2T_1$   
 (C)  $M_2E_2A_1S_2U_1R_1N_1T_1$   
 (D)  $M_2E_3A_1S_2U_1R_1N_1T_1$

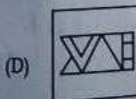
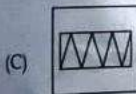
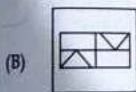


17. If X says that his mother is the only daughter of Y's mother, then how is Y related to X?
- (A) Brother  
(B) Son  
(C) Uncle  
(D) Father

18. A solid cube of each side 8 cm, has been painted red, blue and black on pairs of opposite faces. It is then cut into pairs of blocks of each side 2 cm. How many cubes have no face painted?


- (A) 0  
(B) 4  
(C) 8  
(D) 12

19. Find out the alternative figure which contains the given figure as its part.

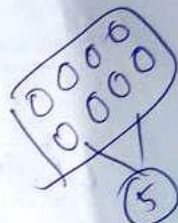


hi X  
mm (dew)  
y

20. Identify the figure that completes the pattern.



(A) Y



21. A university library budget committee must reduce exactly five of eight areas of expenditure - I, J, K, L, M, N, O and P - in accordance with the following conditions:
- If both I and O are reduced, P is also reduced.

If L is reduced, neither N nor O is reduced.

If M is reduced, J is not reduced.

Of the three areas J, K and N exactly two are reduced.

If both K and N are reduced, which one of the following is a pair of areas neither of which could be reduced?

- (A) I, L  
(B) J, L  
(C) J, M  
(D) I, J

Handwritten notes: (I, O) X, P, then, yes, L → ~N, ~P.

SPACE FOR ROUGH WORK

SCB

22. Which of these statements reflects a contrast between two flowers?

- (A) This tulip is as colourful as a rose.
- (B) This tulip does not smell as bad as a daffodil.
- (C) This tulip turns towards light just like sunflower.
- (D) This tulip is grown in bunches, like a lotus.

23. Choose the missing terms out of the given alternatives.

EJO, TYD, INS, XCH, ?

- (A) NRW
- (B) MRW
- (C) MSX
- (D) NSX

Handwritten solution for Q23:  

$$\begin{array}{ccccccccc} E & F & G & H & I & J & K & L & M & N & O \\ +4 & & & & & & & & & & \\ \hline & & & & & & & & & & \end{array}$$
  

$$\begin{array}{ccccccc} T & U & V & W & X & Y & Z \\ +4 & & & & & & \\ \hline & & & & & & \end{array}$$
  
 N O P Q R    M N O P Q R

24. Choose which of the following will be sufficient to find: What time did the bus leave today?

Statements:

- I. The bus normally leaves on time.
- II. The scheduled departure is at 12:30.

- (A) I alone is sufficient while II alone is not sufficient
- (B) II alone is sufficient while I alone is not sufficient
- (C) Either I or II is sufficient
- (D) Neither I nor II is sufficient

25. In the following question below are given three statements followed by three conclusions numbered I, II and III. You have to take the two statements to be true even if they seem to be at variance from the commonly known facts. Read all the conclusions and then decide which of the given conclusions logically follow from the two given statements, disregarding commonly known facts.

Statements:

Some pigeons are eagles.

All eagles are sparrows.

Some sparrows are not pigeons.

Conclusions:

- I. Some sparrows are pigeons.
- II. All pigeons are sparrows.
- III. All eagles are pigeons.

- (A) Only I follows
- (B) Only II follows
- (C) Only III follows
- (D) Both I and III follows



26. Find the odd one out in the given series:

ZA, RS, DE, JK, PR, LM, YZ, NO

- (A) JK
- (B) LM
- (C) ZA
- (D) PR

Handwritten solution for Q26:  
 P Q R S DE  
 JK  
 PR  
 LM

27. In an office, 30% of the employees were women and 70% of the employees were above the age of 40 years, out of which 60% are men. Find the percentage of out of the total number of women employees.

- (A) 98%  
(B) 93.33%  
(C) 70.44%  
(D) 80.66%

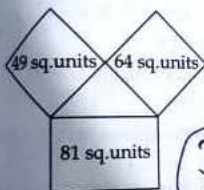
(740)  
60% of 70

28. What is the next number 14, 24, 12, ...

- (A) 186  
(B) 188  
(C) 190  
(D) 206

42%  
60 x 74  
164  
132  
54  
186

29. Three squares are there as shown on the three sides of the triangle; find the area of the triangle from the respective areas of the squares.



- (A)  $15\sqrt{5}$   
(B)  $12\sqrt{5}$   
(C)  $2\sqrt{5}$   
(D) 1

38 x 30  
38 x 30  
106

38  
x 3  
4

9-3  
45

13

30. Two taps A and B can fill a tank in 12 minutes and 15 minutes respectively. The tank can be emptied by a third tap C in 6 minutes. If A and B are kept open for 5 minutes in the beginning and then C is opened along with A and B being kept open, the time taken to empty the tank is:

- (A) 60 minutes  
(B) 45 minutes  
(C) 30 minutes  
(D) 75 minutes

12  
15  
6  
C  
A  
B  
A=5  
B=4  
38  
x 25  
950  
750  
1700

31. In a group of 24 members, each member drinks either tea or coffee or both. If 15 of them drink tea and 18 drink coffee, find the probability that a person selected from the group drinks both tea and coffee.

- (A)  $1/8$   
(B)  $3/8$   
(C)  $5/24$   
(D) None of the options

26.6  
x 3  
79.8  
53

32. Arjun by car takes double the time taken by bus to travel from Delhi to Agra. What is the Speed of the Bus if the Speed of Car is 40 km/hr?

- (A) 40 km/hr  
(B) 60 km/hr  
(C) 80 km/hr  
(D) 30 km/hr

8min  
A+B+C  
= 5  
5  
+ 4  
- 8  
1min

SPACE FOR ROUGH WORK

SCB

Directions for question number 33 to 35 :

Read the following information carefully and then answer the questions given below it.

A, B, C, D, E and F are six members of a family.

There are two married couples among them.

C is the mother of A and F.

E is the father of D.

A is the grandson of B.

The total number of female members in the family is three.

33. How is B related to F?

- (A) Sister  
(B) Grandmother  
(C) Wife  
(D) Data inadequate

Handwritten notes for Q33:  
Married Couple (B, C)  
(F) is son of (C) and (E)  
A is son of (C) and (E)  
D is son of (E) and (F)  
E is father of D  
C is mother of A and F  
A is grandson of B

34. How is F related to A?

- (A) Brother  
(B) Daughter  
(C) Son  
(D) None of the options

Handwritten notes for Q34:  
B is father of A  
A is son of B and C  
C is mother of A and F  
F is brother of A

35. Which of the following pairs is one of the married couples?

- (A) E - F  
(B) B - D  
(C) E - B  
(D) A - F

Directions for question number 36 and 37 :

Consists of a question and two statements, labelled (1) and (2), in which certain data are given. You have to decide whether the data given in the statements are sufficient for answering the question. Using the data given in the statements, plus your knowledge of mathematics and everyday facts.

36. How is R related to S?

Statement (1) :

T, the wife of R's only brother C, does not have any siblings.

Statement (2) :

S is T's brother-in-law's wife.

- (A) Only Statement (1) is required for answering the question  
(B) Only Statement (2) is required for answering the question  
(C) Both Statement together are required to answer the question  
(D) Answer cannot be ascertained with the given information

37. What is the Standard Deviation (SD) of the four numbers A, B, C, D?

Statement (1) :

The sum of A, B, C and D is 24.

Statement (2) :

The sum of the squares of A, B, C and D is 224.

- (A) Only Statement (1) is required for answering the question  
(B) Only Statement (2) is required for answering the question  
(C) Both Statement together are required to answer the question  
(D) Answer cannot be ascertained with the given information



Directions for question number 38 to 40 :  
Answer the following questions on the basis of the directions given below :

Directions : For the Assertion (A) and Reason (R) below, choose the correct alternative from the following :

- Both (A) and (R) are true and (R) is the correct explanation of (A).
- Both (A) and (R) are true and (R) is not the correct explanation of (A).
- (A) is true but (R) is false.
- (A) is false but (R) is true.

38. Assertion (A) :

Vibrators are provided near the roof.

Reason (R) :

Conduction takes place better near the roof.

- I
- II
- III
- IV

39. Assertion (A) :

Salt is added to cook food at higher altitudes.

Reason (R) :

Temperature is lower at higher altitudes.

- I
- II
- III
- IV

40. Assertion (A) :

Moon cannot be used as a satellite for communication.

Reason (R) :

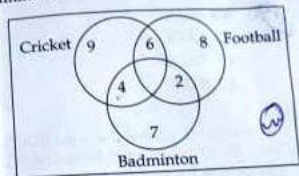
Moon does not move in the equatorial plane of the Earth.

- I
- II
- III
- IV

30%  $\frac{4.2}{126}$

Directions - Question number 41 and 42 are based on the diagram given below :

In a class there are 40 students who play at least one game out of Football, Cricket and Badminton.



41. What percentage of students play only one game ?

- 50%
- 60%
- 65%
- 70%

42. What percentage of students play all the three games ?

- 4%
- 5%
- 8%
- 10%

SPACE FOR ROUGH WORK



**PART - B**  
**TECHNICAL AREA**

Choose the most appropriate option.  
(Q.No. 43 to 120)

43. Which of the following machine model can be used in a necessary and sufficient sense for lexical analysis in modern computer language ?

(A) Deterministic Push down Automata  
(B) Finite Automata  
(C) Non-Deterministic Finite Automata  
(D) Turing Machine

44. 58000 LOC gaming software is developed with effort of 3 person-year. What is the productivity of person-month ?

(A) 1.9 KLOC  
(B) 1.6 KLOC  
(C) 4.8 KLOC  
(D) 4.2 KLOC

45. An instance of relational schema  $R(A, B, C)$  has distinct values of A including NULL values. Which one of the following is true ?

(A) A is a candidate key  
(B) A is not a candidate key  
(C) A is a primary key  
(D) Both "A is a candidate key" and "A is a primary key"

46. The physical location of a record is determined by a mathematical formula that transforms a file key into a record location is :

(A) B-Tree File  
(B) Hashed File  
(C) Indexed File  
(D) Sequential File

47. Debugger is a program that :  
(A) Allows to examine and modify the contents of registers  
(B) Allows to set breakpoints, execute a segment of program and display contents of register  
(C) Does not allow execution of a segment of program  
(D) All the options

48. Which of the following Page Replacement Algorithm suffers from the belady's anomaly ?

(A) LRU  
(B) Optimal Page Replacement  
(C) FIFO  
(D) Both LRU and FIFO

49. Binary search tree contains the values 1, 2, 3, 4, 5, 6, 7, 8. The tree is traversed in pre-order and the values are printed out. Which of the following sequences is a valid output ?

(A) 53124786  
(B) 53126487  
(C) 53241678  
(D) 53124768

50. Most NoSQL databases support automatic \_\_\_\_\_ meaning that you get high availability and disaster recovery.

(A) Processing  
(B) Scalability  
(C) Replication  
(D) All of the options

41. In an operating system, processes that are terminated but, for some reason must have its task structure in the process table are referred as

- (A) Zombies
- (B) Orphans
- (C) Parent Process
- (D) Child Process

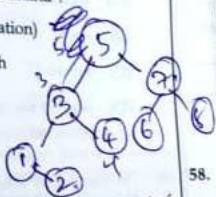
Ans: (A)

52. In \_\_\_\_\_, other nodes verify the validity of the block by checking that the hash of the data of the block is less than a preset number.

- (A) Proof of Burn
- (B) Proof of STAKE
- (C) Proof of Work
- (D) All of the options

53. Which of the following can be used when creating a pool of global addresses instead of the netmask command?

- (A) / (slash notation)
- (B) prefix-length
- (C) no mask
- (D) block-size



54. Which of the following is a component of Hadoop?

- (A) YARN
- (B) HDFS
- (C) Map reduce
- (D) All of the options

55. The \_\_\_\_\_ command will show you the translation table containing all the active NAT entries.

- (A) show ip nat translations
- (B) show ip nat fl
- (C) show ip nat states
- (D) none of the options

(A) (Ans)

56. Which of the following is correct Content-Type header that a server side script should send for SSE in HTML5?

- (A) Content-Type: text/event-stream
- (B) Content-Type: text/application-stream
- (C) Content-Type: text/data-stream
- (D) None of the options

57. \_\_\_\_\_ is automatically loaded and operates as part of browser.

- (A) Add-ons
- (B) Plug-ins
- (C) Utilities
- (D) Widgets



58. In an IPv6 header, the traffic class field is similar to the \_\_\_\_\_ field in the IPv4 header.

- (A) TOS field
- (B) Fragmentation field
- (C) Fast Switching
- (D) Option field

(B) (Ans)

SPACE FOR ROUGH WORK

SCB

50. \_\_\_\_\_ tells a firewall about how to reassemble a data stream that has been divided into packets.

- (A) The source routing feature
- ☒ (B) The number in the header's identification field
- (C) The destination IP address
- (D) The header checksum field in the packet header

60. Match the following :

(1) Waterfall model	(a) Specifications can be developed incrementally
(2) Evolutionary model	(b) Re-usability in development
(3) Component-based software engineering	(c) Explicit recognition of risk
(4) Spiral development	(d) Inflexible partitioning of the project into stages

- ☒ (A) (1)-(a), (2)-(b), (3)-(c), (4)-(d)
- ☒ (B) (1)-(d), (2)-(a), (3)-(b), (4)-(c)
- (C) (1)-(d), (2)-(b), (3)-(a), (4)-(c)
- (D) (1)-(c), (2)-(a), (3)-(b), (4)-(d)

61. Which of the following property is related to a cryptographic hash functions ?

- (A) One way Function ☒
- (B) Inversible
- ☒ (C) Non-Deterministic
- ☒ (D) All of the options

62. In classful addressing, a large part of the available addresses are \_\_\_\_\_

- (A) Dispersed
- (B) Blocked
- (C) Wasted ☒
- (D) Reserved ☒

63. To the detection of up to 5 errors in all cases, the minimum Hamming distance in a block code must be \_\_\_\_\_

- (A) 5
- (B) 6
- (C) 10
- ☒ (D) 8

64. Which element is used to define discrete unit of content such as a blogpost, comment and so on ?

- (A) section
- (B) class
- (C) article
- (D) none of the options

65. On computers where there are multiple operating system, the decision to load a particular one is done by \_\_\_\_\_

- (A) PCB
- (B) Inode
- (C) File Control Block
- ☒ (D) Boot Loader



Which one of the following statements is incorrect?

- (A) The number of regions corresponds to the cyclomatic complexity.
- (B) Cyclomatic complexity for a flow graph  $G$  is  $V(G) = N - E + 2$ , where  $E$  is the number of edges and  $N$  is the number of nodes in flow graph.
- (C) Cyclomatic complexity for a flow graph  $G$  is  $V(G) = E - N + 2$ , where  $E$  is the number of edges and  $N$  is the number of nodes in flow graph.
- (D) Cyclomatic complexity for a flow graph  $G$  is  $V(G) = P + 1$ , where  $P$  is the number of predicate nodes contained in the flow graph  $G$ .

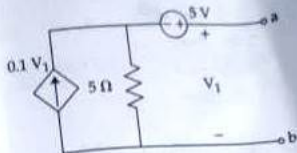
67. Which type of linked list stores the address of the header node in the next field of the last node?

- (A) Singly linked list
- (B) Circular linked list
- (C) Doubly linked list
- (D) Hashed list

68. Which sorting algorithm sorts by moving the current data element past the already sorted values and repeatedly interchanges it with the preceding value until it is in its correct place?

- (A) Insertion sort
- (B) Internal sort
- (C) External sort
- (D) Radix sort

The resistance to be connected across terminal a, b for maximum power transfer to it is:



- (A) 40 Ω
- (B) 5 Ω
- (C) 2.5 Ω
- (D) 10 Ω

70. Which open addressing technique is free from Clustering problems?

- (A) Linear probing
- (B) Quadratic probing
- (C) Double hashing
- (D) Rehashing

71. \_\_\_\_\_ is a partitioning of single physical server into multiple logical servers.

- (A) Virtualization
- (B) Private cloud
- (C) Hybrid cloud
- (D) Public cloud

72. The recurrence relation  $T(n) = 7T(n/7) + n$  has the solution:

- (A)  $O(n)$
- (B)  $O(\log n)$
- (C)  $O(n \log(n))$
- (D)  $O(n^2)$

SPACE FOR ROUGH WORK

$a=7$   $b=7$   
 $n \log_b a$   
 $n \log_7 7$   
 $n \cdot 1 = n$   
 $O(n)$

\_\_\_\_\_ has a feature of remote access through which a customer can access the data from anywhere and at any time with the help of internet connection.

- (A) IaaS
- (B) PaaS
- (C) NaaS
- (D) SaaS

74. A special PCM system uses 32 channels of data, one whose purpose is an identification (ID) and synchronization. The sampling rate is 4 kHz. The word length is 5 bits. Find the serial data rate.

- (A) 1280 kHz
- (B) 160 kHz
- (C) 320 kHz
- (D) 640 kHz

75. Which of the following tag is used intended for navigation in HTML5 ?

- (A) nav
- (B) footer
- (C) section
- (D) navigation tag

76. Contiguous memory allocation having variable size partition suffers from :

- (A) External Fragmentation
- (B) Internal Fragmentation
- (C) Both External and Internal Fragmentation
- (D) None of the options

77. Consider the algorithm that solves problems of size  $n$  by recursively solving two sub problems of size  $n-1$  and then combining the solutions in constant time. Then the running time of the algorithm would be :

- (A)  $O(n)$
- (B)  $O(\log n)$
- (C)  $O(n \log n)$
- (D)  $O(n^2)$

78. Let  $X_1, \dots, X_{50}$  be independent random variables following  $N(0, 1)$  distribution. Let  $Y = \sum_{i=1}^{50} X_i^2$ , and  $E(Y) = a$  and  $\text{Var}(Y) = b$ .

Then, the ordered pair  $(a, b)$  is :

- (A) (50, 100)
- (B) (50, 50)
- (C) (25, 50)
- (D) (25, 100)

79. Calculate the modulation percentage if the modulating signal is 8 V and carrier is of 12 V ?

- (A) 50
- (B) 67
- (C) 150
- (D) 33

80. The program written for binary search calculates the midpoint of the span as  $\text{mid} := (\text{Low} + \text{High})/2$ . The program works well if the number of elements in the list is small (about 32,000) but it behaves abnormally when the number of elements is large. This can be avoided by performing the calculation as :

- (A)  $\text{mid} := (\text{High} - \text{Low})/2 + \text{Low}$
- (B)  $\text{mid} := (\text{High} - \text{Low} + 1)/2$
- (C)  $\text{mid} := (\text{High} - \text{Low})/2$
- (D)  $\text{mid} := (\text{High} + \text{Low})/2$

81. Identify the odd one out.  
 (A) Amazon web service  
 (B) Microsoft Azure  
 (C) Google cloud Platform  
 (D) Twitter Platform

82. Considering binary relationships, possible cardinality ratios are :  
 (A) one : one  
 (B) 1 : N  
 (C) M : N  
 (D) All the options

83. Typical time requirement for operations on queues is :  
 (A)  $O(1)$   
 (B)  $O(n)$   
 (C)  $O(\log n)$   
 (D)  $O(n^2)$

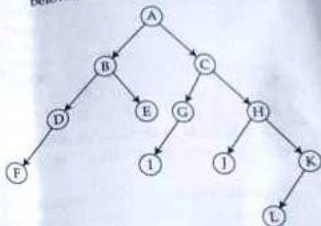
84. In the congestion avoidance algorithm, the size of the congestion window increases \_\_\_\_\_ until congestion is detected.  
 (A) Exponentially  
 (B) Additively  
 (C) Multiplicatively  
 (D) Suddenly

85. \_\_\_\_\_ possible labels are allowed in the first level of generic domain.  
 (A) 10  
 (B) 12  
 (C) 16  
 (D) none of the options

86. Which of the following techniques deals with sorting the data stored in the computer's memory ?  
 (A) Distribution sort  
 (B) Internal sort  
 (C) External sort  
 (D) Radix sort

87. How to specify the comment in the XML document ?  
 (A) `<!-- -->`  
 (B) `<!-- -->`  
 (C) `<!-- -->`  
 (D) `</-- -->`

88. The Preorder traversal of a tree given below is :



- (A) ABDFECGHIJKL  
 (B) ABCDEGHFIJKL  
 (C) ABEDFCGHIJKL  
 (D) ABDFECG I J H K L

89. What is the basis of KVL ?  
 (A) Conservation of charge  
 (B) Conservation of energy  
 (C) Conservation of power  
 (D) All of the options

90. Limitations of the XML Data Type are :  
 (A) It cannot be compared or sorted. This means an XML data type cannot be used in a GROUP BY statement.  
 (B) It cannot be used as a key column in an index.  
 (C) The value() method of the XML data type returns a scalar value, so it can be specified anywhere where scalar values are allowed.  
 (D) All of the options.



91. In which modulation discrete values of carrier frequencies is used to transmit binary data?

(A) Phase Shift Keying  
(B) Amplitude Shift Keying  
(C) Frequency Shift Keying  
(D) Disk Shift Keying

92. If one uses straight two-way merge sort algorithm to sort the following elements in ascending order 20, 47, 15, 8, 9, 4, 40, 30, 12, 17 then the order of those elements after the second pass of the algorithm is:

(A) 8, 9, 15, 20, 47, 4, 12, 17, 30, 40  
(B) 8, 15, 20, 47, 4, 9, 30, 40, 12, 17  
(C) 15, 20, 47, 4, 8, 9, 12, 30, 40, 17  
(D) 4, 8, 9, 15, 20, 47, 12, 17, 30, 40

93. Consider the basic COCOMO model where E is the effort applied in person-months, D is the development time in chronological months, KLOC is the estimated number of delivered lines of code (in thousands) and  $a_b$ ,  $b_b$ ,  $c_b$ ,  $d_b$  have their usual meanings. The basic COCOMO equations are of the form.

(A)  $E = a_b(KLOC) \exp(b_b)$ ,  $D = c_b(E) \exp(d_b)$   
(B)  $D = a_b(KLOC) \exp(b_b)$ ,  $E = c_b(D) \exp(d_b)$   
(C)  $E = a_b \exp(b_b)$ ,  $D = c_b(KLOC) \exp(d_b)$   
(D)  $E = a_b \exp(d_b)$ ,  $D = c_b(KLOC) \exp(b_b)$

94. If main memory access time is 400  $\mu s$ , TLB access time 50  $\mu s$ , considering TLB hit 90%, what will be the overall access time?

(A) 800  $\mu s$   
(B) 490  $\mu s$   
(C) 485  $\mu s$   
(D) 450  $\mu s$

95. Consider a software project with the following information domain characteristic for calculation of function point metric.

Number of external inputs (I) = 30

Number of external output (O) = 60

Number of external inquiries (E) = 23

Number of files (F) = 08

Number of external interfaces (N) = 02

It is given that the complexity weighting factors for I, O, E, F and N are 4, 5, 4, 10 and 7, respectively. It is also given that, out of fourteen value adjustment factors that influence the development effort, four factors are not applicable, each of the other four factors have value 3, and each of the remaining factors have value 4. The computed value of function point metric is \_\_\_\_\_

(A) 612.06

(B) 212.05

(C) 305.09

(D) 806.9

96. Consider a software program that is artificially seeded with 100 faults. While testing this program, 159 faults are detected, out of which 75 faults are from those artificially seeded faults. Assuming that both real and seeded faults are of same nature and have same distribution, the estimated number of undetected real faults is \_\_\_\_\_

(A) 28

(B) 175

(C) 56

(D) 84

97. A direct mapped cache is of size 32 KB and has block size 32 Bytes. CPU also generates 32 bit address. Number of bits needed for indexing the cache :

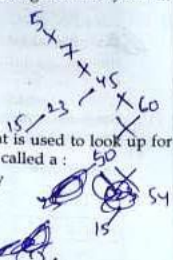
- (A) 14
- (B) 15
- (C) 10
- (D) 17

98. Suppose we have to insert the following sequence of keys into an empty binary search tree :

5, 7, 45, 60, 50, 23, 15, 54

What would be the height of binary search tree ?

- (A) 3
- (B) 4
- (C) 5
- (D) 6



99. An attribute(s) that is used to look up for records in a file is called a :

- (A) Function key
- (B) Catalog key
- (C) Access key
- (D) Search key

100. Consider a Simple Checkpointing Protocol and the following set of operations in the log.

(start, T4); (write, T4, y, 2, 3); (start, T1); (commit, T4); (write, T1, z, 5, 7); (Checkpoint);

(start, T2); (write, T2, x, 1, 9); (commit, T2); (start, T3); (write, T3, z, 7, 2);

if a crash happens now and the system tries to recover using both undo and redo operations, what are the contents of the undo list and the redo list ?

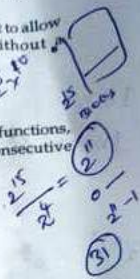
- (A) Undo : T3, T1; Redo T2
- (B) Undo : T3, T1; Redo T2, T4
- (C) Undo : none; Redo T2, T4, T3, T1
- (D) Undo : T3, T1, T4; Redo T2

101. Point out the wrong statement :

- (A) Non-Relational databases require that schemas be defined before you can add data.
- (B) NoSQL databases are built to allow the insertion of data without a predefined schema.
- (C) NewSQL databases are built to allow the insertion of data without predefined schema.
- (D) All of the options.

102. In which of the following hash functions, do consecutive keys map to consecutive hash values ?

- (A) Division method
- (B) Multiplication method
- (C) Folding method
- (D) Mid-square method

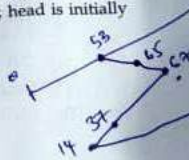


103. One disk queue with requests for I/O to blocks on cylinders. The Request are in the following manner :

98 183 37-122 14 124 65 67

Considering SSTF (shortest seek time first) scheduling, the total number of head movements is, if the disk head is initially at 53 :

- (A) 236
- (B) 246
- (C) 220
- (D) 240



104. What is the advantage of bubble sort over other sorting techniques ?

- (A) It is faster
- (B) Consumes less memory
- (C) Detects whether the input is already sorted
- (D) All of the options

105. One-megabyte memory storage in form of bytes is equal to \_\_\_\_\_

- (A)  $1024$  bytes  
(B)  $1024^2$  bytes  
(C)  $1024^3$  bytes  
(D)  $1024^4$  bytes

106. Which table is used in MS DOS for linked list allocation ?

- (A) TLB  
(B) Page Table  
(C) FAT  
(D) Index Table

107. What is the best case complexity of QuickSort ?

- (A)  $O(n \log n)$   
(B)  $O(\log n)$   
(C)  $O(n)$   
(D)  $O(n^2)$

108. Data leakage threats are done by internal agents. Which of them is not an example of an internal data leakage threat ?

- (A) Data leak from stolen credentials from desk  
(B) Data leak by partners  
(C) Data leak by 3<sup>rd</sup> Party apps  
(D) All of the options

109. If  $x, y, z$  are Boolean variable then  $(x+\bar{y})(x\bar{y}+rz)(\bar{x}\bar{z}+\bar{y})$  is equal to :

- (A)  $x\bar{y}$   
(B)  $x\bar{y}+z$   
(C)  $x\bar{z}$   
(D) none of the options

110. \_\_\_\_\_ uses pretty good privacy algorithm.

- (A) Electronic mails  
(B) File encryption  
(C) Both Electronic mails and File encryption  
(D) None of the options

111. Set of key attributes that identify weak entities related to some owner entity is classified as :

- (A) Structural key  
(B) String key  
(C) Partial key  
(D) Foreign key

112. Given the truth table of a Binary Operation \$ as follows :

X	Y	$X \$ Y$
1	0	1
1	1	1
0	1	0
0	0	1

Identify the matching Boolean Expression.

- (A)  $X \$ \neg Y$   $0 \cdot 0 = 0, 0 \cdot 1 = 0$   
(B)  $\neg X \$ Y$   $0 \cdot 0 = 0$   
(C)  $\neg X \$ \neg Y$   $0 \cdot 1 = 0$   
(D) none of the options

113. An expression in the domain relational calculus is of the form :

- (A)  $\{P(x_1, x_2, \dots, x_n) \mid <x_1, x_2, \dots, x_n>\}$   
(B)  $\{x_1, x_2, \dots, x_n \mid <x_1, x_2, \dots, x_n>\}$   
(C)  $\{x_1, x_2, \dots, x_n \mid x_1, x_2, \dots, x_n\}$   
(D)  $\{<x_1, x_2, \dots, x_n> \mid P(x_1, x_2, \dots, x_n)\}$

$(x+y)(x\bar{y}+x\bar{y}z)$   
 $(x+y)$   
 $x\bar{y}+x\bar{y}z$   
 $x\bar{y}(1+z)$

$x\bar{y}+xy+x\bar{y}$   
 $x\bar{y}+xy$

$\bar{y}(x+\bar{x})$   
 $\bar{y}+xy$



114. The best running time is defined as/obtained as/by :

(A) the least or smallest of all the running times the algorithm takes, on inputs of a particular size.

(B) an input that requires maximum computations or resources.

(C) averaging the different running times for all inputs of a particular kind.

(D) none of the options.

115. In \_\_\_\_\_ VMs do not simulate the underlying hardware.

(A) Para Virtualization

(B) Full Virtualization

(C) Hardware-Assisted Virtualization

(D) Network Virtualization

116. Consider a control unit generating the control signals. These control signals are divided into five mutually exclusive groups as shown below :

Groups	G1	G1	G1	G1	G1
Control Signals	3	7	10	12	2

How many bits are saved using the Vertical Micro-programmed instead of Horizontal Micro-programmed control unit ?

(A) 14

(B) 34

(C) 20

(D) None

117. The number of tokens in the following C statement is

`printf("i=%d, &i=%x", i, &i);`

(A) 8

(B) 4

(C) 7

(D) 10

118. The number of 4 digit numbers which contain not more than two different digits is :

(A) 576

(B) 567

(C) 513

(D) 504

119. You are working with a network that is 172.16.0.0 and would like to support 600 hosts per subnet. What subnet mask should you use ?

(A) 255.255.192.0

(B) 255.255.224.0

(C) 255.255.252.0

(D) None of the options

120. PI in XML specification stands for

(A) priceless instruction

(B) processing instruction

(C) polymorphic inheritance

(D) primary instruction

- o o o -